



# MATEMÁTICA

					
7	8	10	4	2	8


# Conte e marque a quantidade



2

6


1



3

8


9



5

7

4




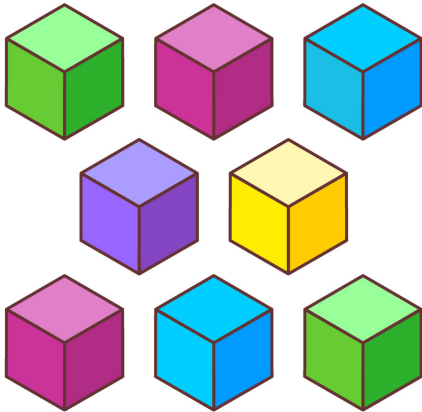


10

6

2

# Conte e marque a quantidade

							
<table border="1"><tbody><tr><td>1</td><td>4</td><td>2</td></tr></tbody></table>	1	4	2	<table border="1"><tbody><tr><td>9</td><td>5</td><td>6</td></tr></tbody></table>	9	5	6
1	4	2					
9	5	6					
							
<table border="1"><tbody><tr><td>6</td><td>7</td><td>10</td></tr></tbody></table>	6	7	10	<table border="1"><tbody><tr><td>4</td><td>8</td><td>1</td></tr></tbody></table>	4	8	1
6	7	10					
4	8	1					


# Conte e marque a quantidade



2

5


4



9

8


6



1

7

10







4

3


8



# Conte e marque a quantidade

							
<table border="1"><tbody><tr><td>4</td><td>5</td><td>6</td></tr></tbody></table>	4	5	6	<table border="1"><tbody><tr><td>7</td><td>8</td><td>2</td></tr></tbody></table>	7	8	2
4	5	6					
7	8	2					
							
<table border="1"><tbody><tr><td>3</td><td>7</td><td>1</td></tr></tbody></table>	3	7	1	<table border="1"><tbody><tr><td>2</td><td>4</td><td>9</td></tr></tbody></table>	2	4	9
3	7	1					
2	4	9					


# Conte e marque a quantidade



2

5


10



9

8


6



4

7

9



7

3

8

# Conte e marque a quantidade



9

4

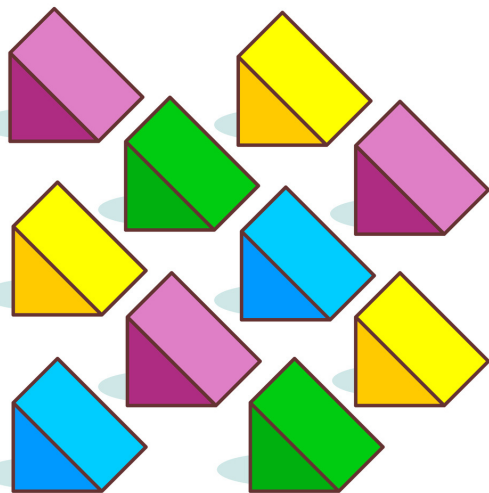
7



6

1


5



8

5

10



5

3

2


# Conte e marque a quantidade



2

5


6



5

6

3



7

8

10







4

2

8

# Conte e marque a quantidade

							
<table border="1"><tbody><tr><td>2</td><td>5</td><td>1</td></tr></tbody></table>	2	5	1	<table border="1"><tbody><tr><td>9</td><td>3</td><td>6</td></tr></tbody></table>	9	3	6
2	5	1					
9	3	6					
							
<table border="1"><tbody><tr><td>8</td><td>7</td><td>4</td></tr></tbody></table>	8	7	4	<table border="1"><tbody><tr><td>10</td><td>2</td><td>1</td></tr></tbody></table>	10	2	1
8	7	4					
10	2	1					


# Conte e marque a quantidade



2

5


4



9

8

6



10

7

9




4

3

8




# Conte e marque a quantidade



1

4


2



9

5

6



6

7

10







4

8




1

# Conte e marque a quantidade





							
<table border="1"><tbody><tr><td>2</td><td>1</td><td>3</td></tr></tbody></table>	2	1	3	<table border="1"><tbody><tr><td>6</td><td>5</td><td>7</td></tr></tbody></table>	6	5	7
2	1	3					
6	5	7					
							
<table border="1"><tbody><tr><td>4</td><td>5</td><td>2</td></tr></tbody></table>	4	5	2	<table border="1"><tbody><tr><td>9</td><td>8</td><td>2</td></tr></tbody></table>	9	8	2
4	5	2					
9	8	2					







# Conte e marque a quantidade

							
<table border="1"><tbody><tr><td>4</td><td>5</td><td>3</td></tr></tbody></table>	4	5	3	<table border="1"><tbody><tr><td>7</td><td>8</td><td>6</td></tr></tbody></table>	7	8	6
4	5	3					
7	8	6					
							
<table border="1"><tbody><tr><td>3</td><td>7</td><td>1</td></tr></tbody></table>	3	7	1	<table border="1"><tbody><tr><td>2</td><td>3</td><td>9</td></tr></tbody></table>	2	3	9
3	7	1					
2	3	9					

# Conte e marque a quantidade

							
<table border="1"><tbody><tr><td>2</td><td>5</td><td>4</td></tr></tbody></table>	2	5	4	<table border="1"><tbody><tr><td>9</td><td>8</td><td>6</td></tr></tbody></table>	9	8	6
2	5	4					
9	8	6					
							
<table border="1"><tbody><tr><td>1</td><td>7</td><td>10</td></tr></tbody></table>	1	7	10	<table border="1"><tbody><tr><td>4</td><td>3</td><td>8</td></tr></tbody></table>	4	3	8
1	7	10					
4	3	8					

# Conte e marque a quantidade

							
<table border="1"><tbody><tr><td>2</td><td>5</td><td>1</td></tr></tbody></table>	2	5	1	<table border="1"><tbody><tr><td>9</td><td>6</td><td>3</td></tr></tbody></table>	9	6	3
2	5	1					
9	6	3					
							
<table border="1"><tbody><tr><td>7</td><td>8</td><td>10</td></tr></tbody></table>	7	8	10	<table border="1"><tbody><tr><td>4</td><td>2</td><td>8</td></tr></tbody></table>	4	2	8
7	8	10					
4	2	8					


# Conte e marque a quantidade



2

5


1



9

3


6



8

7

5







4

2

9

# Conte e marque a quantidade

							
<table border="1"><tbody><tr><td>9</td><td>4</td><td>7</td></tr></tbody></table>	9	4	7	<table border="1"><tbody><tr><td>6</td><td>1</td><td>5</td></tr></tbody></table>	6	1	5
9	4	7					
6	1	5					
							
<table border="1"><tbody><tr><td>8</td><td>5</td><td>10</td></tr></tbody></table>	8	5	10	<table border="1"><tbody><tr><td>6</td><td>3</td><td>2</td></tr></tbody></table>	6	3	2
8	5	10					
6	3	2					